
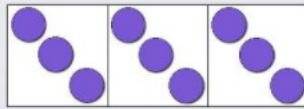
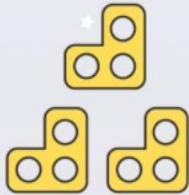
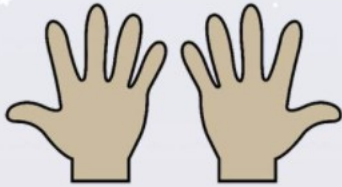


**Skill: Solve one-step problems involving multiplication.**

Equal or unequal?



Which one doesn't belong?



Explain your answer.



There are \_\_\_\_\_ groups of \_\_\_\_\_ flowers.

There are \_\_\_\_\_ flowers altogether.

**Key Vocabulary**

Same

Equal

Unequal

Different

Counting in jumps of

Groups

Lots of

Arrays

Lots of

Repeated

Row

Column

**Resources:**

Numicon  
Number beads  
Counting objects  
Unifix cubes

Place value counters  
Hundred Square

Bar model  
Bead Strings