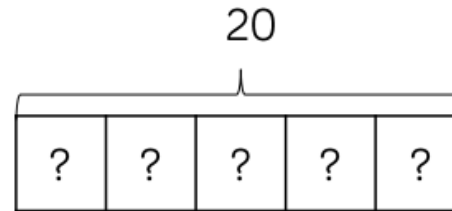
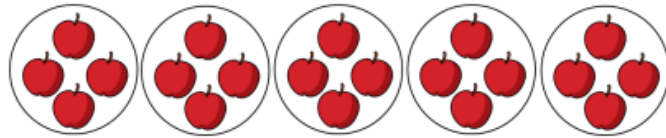
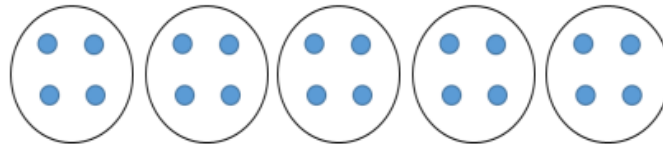
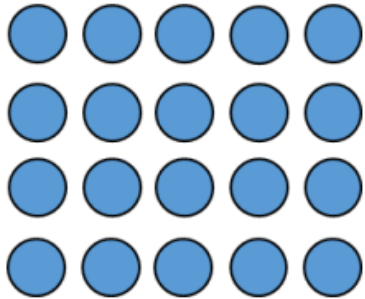


## Skill: Solve one-step problems with division (sharing)

Share the sweets equally between the two friends.



There are 20 apples altogether.  
They are shared equally between 5 bags.  
How many apples are in each bag?



## Key Vocabulary

Calculation

Calculate

Odd

Even

Divide

Division

Groups

Grouping

Sharing

Equal

Unequal

Same

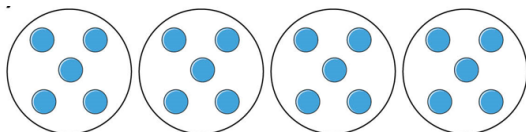
## Resources:

Numicon  
Number beads  
Counting objects  
Unifix cubes

Place value counters  
Hundred Square

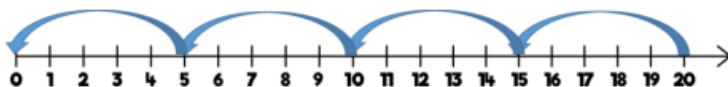

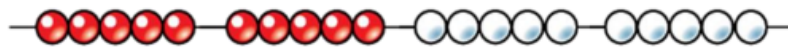

Bar model  
Bead Strings

## Skill: Solve one-step problems with division (grouping)


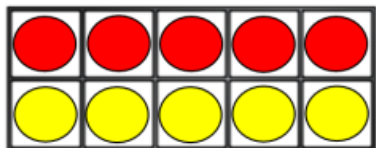
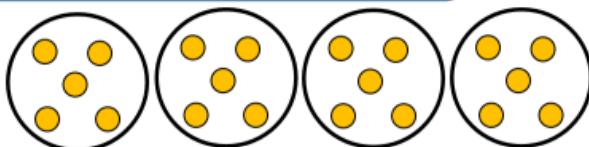
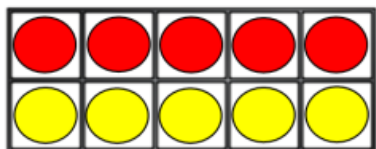


How many groups are there?

How many counters can you see?



There are 20 apples altogether.  
They are put in bags of 5.  
How many bags are there?



## Key Vocabulary

Calculation

Calculate

Odd

Even

Divide

Division

Groups

Grouping

Sharing

Equal

Unequal

Same

## Resources:

Numicon  
Number beads  
Counting objects  
Unifix cubes

Place value counters  
Hundred Square

Bar model  
Bead Strings